


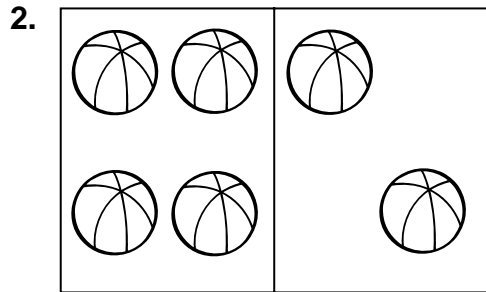


# Show Addition

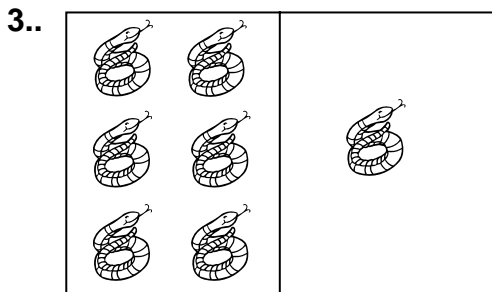
**Directions:** Write a number sentence to go with each picture.




\_\_\_ + \_\_\_ = \_\_\_




\_\_\_ + \_\_\_ = \_\_\_



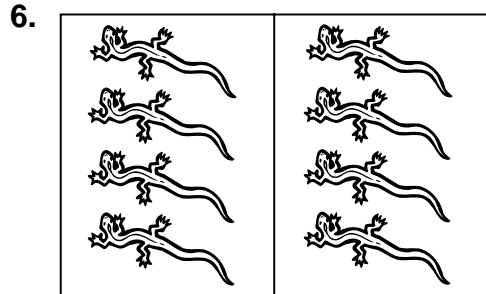
\_\_\_ + \_\_\_ = \_\_\_



\_\_\_ + \_\_\_ = \_\_\_



\_\_\_ + \_\_\_ = \_\_\_



\_\_\_ + \_\_\_ = \_\_\_



# More Package Math

**Directions:** Complete each problem. The answer will be a clue to the present inside. Write the present on the line under each package.

1. 
$$\begin{array}{r} 6 \\ + 5 \\ \hline \end{array}$$

\_\_\_\_\_

2. 
$$\begin{array}{r} 4 \\ + 8 \\ \hline \end{array}$$

\_\_\_\_\_

3. 
$$\begin{array}{r} 16 \\ - 3 \\ \hline \end{array}$$

\_\_\_\_\_

4. 
$$\begin{array}{r} 15 \\ - 5 \\ \hline \end{array}$$


\_\_\_\_\_

5. 
$$\begin{array}{r} 7 \\ + 7 \\ \hline \end{array}$$


\_\_\_\_\_



**Marbles**



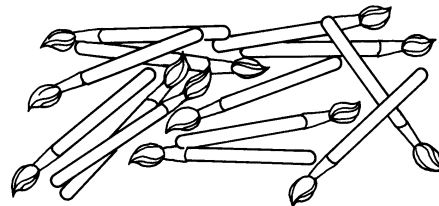
**Crayons**



**Jacks**



**Tops**



**Paintbrushes**