

# COUNTING 1-100

My name is: \_\_\_\_\_

\_\_\_\_\_




\_\_\_\_\_

Connect the dots from 1-10.



# COUNT THE FROGS

**Directions:** Count each group of frogs. Then draw a line to the lily pad with the matching number.



# SPOTS, STRIPES, AND LEAVES



How many dots are there altogether on the butterflies? \_\_\_\_\_

How many leaves are there altogether on the tree? \_\_\_\_\_

How many orange stripes are there in all on the caterpillars? \_\_\_\_\_



# How MANY ONES, FIVES, OR TENS?

**Directions:** Circle the leaf with the correct answer for each question.



How many ones in 10?



How many fives in 10?



How many tens in 40?



How many tens in 100?

